

# Chemistry

## Standard level

### Paper 3

Thursday 17 May 2018 (morning)

Candidate session number

1 hour

--	--	--	--	--	--	--	--	--	--	--

#### Instructions to candidates

- Write your session number in the boxes above.
- Do not open this examination paper until instructed to do so.
- Answers must be written within the answer boxes provided.
- A calculator is required for this paper.
- A clean copy of the **chemistry data booklet** is required for this paper.
- The maximum mark for this examination paper is **[35 marks]**.

Section A	Questions
Answer all questions.	1 – 2

Section B	Questions
Answer all of the questions from one of the options.	
Option A — Materials	3 – 5
Option B — Biochemistry	6 – 8
Option C — Energy	9 – 12
Option D — Medicinal chemistry	13 – 15



Please **do not** write on this page.

Answers written on this page  
will not be marked.

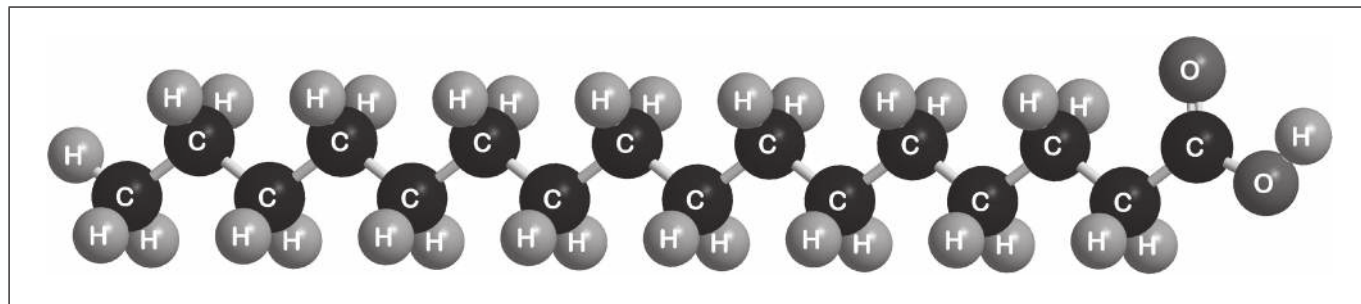


28EP02

### Section A

Answer **all** questions. Answers must be written within the answer boxes provided.

1. Palmitic acid has a molar mass of  $256.5 \text{ g mol}^{-1}$ .



- (a) (i) Part of this molecule is hydrophilic (bonds readily to water) and part hydrophobic (does not bond readily to water). Draw a circle around all of the hydrophilic part of the molecule. [1]
- (ii) When a small amount of palmitic acid is placed in water it disperses to form a layer on the surface that is only one molecule thick. Explain, in terms of intermolecular forces, why this occurs. [2]

.....

.....

.....

.....

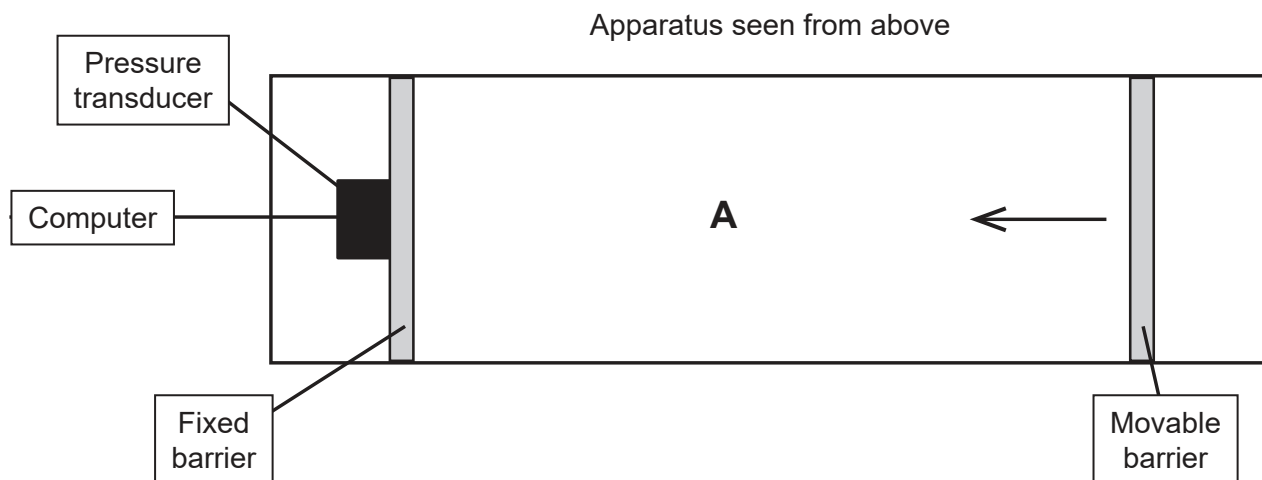
.....

(This question continues on the following page)



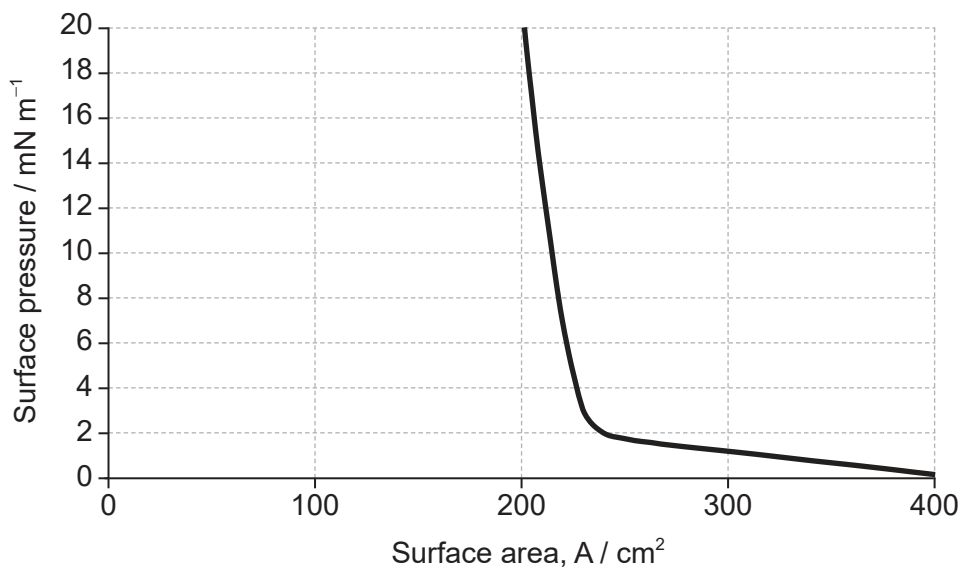
(Question 1 continued)

- (b) The apparatus in the diagram measures the surface pressure created by palmitic acid molecules on the surface of water. This pressure is caused by palmitic acid molecules colliding with the fixed barrier. The pressure increases as the area, **A**, available to the palmitic acid is reduced by the movable barrier.



[Source: Physical Chemistry Chemical Physics, 2001, 3, 4774-4783 -  
Reproduced by permission of The Royal Society of Chemistry]

When a drop of a solution of palmitic acid in a volatile solvent is placed between the barriers, the solvent evaporates leaving a surface layer. The graph of pressure against area was obtained as the area **A** was reduced.



[Source: Influence of Lecithin on Structure and Stability of Parenteral Fat Emulsions,  
Christoph Wabel, 1998, Figure 34. Used with permission]

(This question continues on the following page)



28EP04

**(Question 1 continued)**

- (i) Suggest why there is a small increase in the surface pressure as the area is reduced to about 240 cm<sup>2</sup>, but a much faster increase when it is further reduced. [2]

Above about 240 cm<sup>2</sup>:

.....

.....

.....

At less than about 240 cm<sup>2</sup>:

.....

.....

.....

- (ii) The solution of palmitic acid had a concentration of 0.0034 mol dm<sup>-3</sup>. Calculate the number of molecules of palmitic acid present in the 0.050 cm<sup>3</sup> drop, using section 2 of the data booklet. [2]

.....

.....

.....

.....

- (iii) Assuming the sudden change in gradient occurs at 240 cm<sup>2</sup>, calculate the area, in cm<sup>2</sup>, that a single molecule of palmitic acid occupies on surface of the water.

If you did not obtain an answer for (b)(ii) use a value of  $8.2 \times 10^{16}$ , but this is not the correct answer. [1]

.....

.....

.....



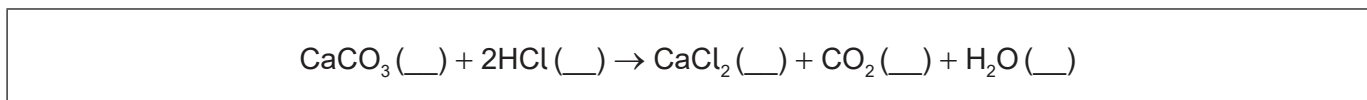
2. Students were asked to investigate how a change in concentration of hydrochloric acid, HCl, affects the initial rate of its reaction with marble chips, CaCO<sub>3</sub>.

They decided to measure how long the reaction took to complete when similar chips were added to 50.0 cm<sup>3</sup> of 1.00 mol dm<sup>-3</sup> acid and 50.0 cm<sup>3</sup> of 2.00 mol dm<sup>-3</sup> acid.

Two methods were proposed:

- (1) using small chips, keeping the acid in excess, and recording the time taken for the solid to disappear
- (2) using large chips, keeping the marble in excess, and recording the time taken for bubbles to stop forming.

- (a) Annotate the balanced equation below with state symbols. [1]



- (b) Neither method actually gives the initial rate. Outline a method that would allow the initial rate to be determined. [1]

.....

.....

.....

- (c) (i) Deduce, giving a reason, which of the two methods would be least affected by the chips not having exactly the same mass when used with the different concentrations of acid. [1]

.....

.....

.....

- (ii) State a factor, that has a significant effect on reaction rate, which could vary between marble chips of exactly the same mass. [1]

.....

(This question continues on the following page)



**(Question 2 continued)**

(d) A group recorded the following results with  $1.00 \text{ mol dm}^{-3}$  hydrochloric acid:

<b>Trial</b>	<b>Time / s <math>\pm 0.01</math> s</b>
1	120.56
2	136.83
3	108.49
Mean	121.96

(i) Justify why it is inappropriate to record the uncertainty of the mean as  $\pm 0.01$  s. [1]

.....  
.....

(ii) If doubling the concentration doubles the reaction rate, suggest the mean time you would expect for the reaction with  $2.00 \text{ mol dm}^{-3}$  hydrochloric acid. [1]

.....  
.....

(iii) Another student, working alone, always dropped the marble chips into the acid and then picked up the stopwatch to start it. State, giving a reason, whether this introduced a random or systematic error. [1]

.....  
.....  
.....



### Section B

Answer **all** of the questions from **one** of the options. Answers must be written within the answer boxes provided.

#### Option A — Materials

3. Aluminium and high density polyethene (HDPE) are both materials readily found in the kitchen, for example as saucepans and mixing bowls respectively. In these applications it is important that they are impermeable to water.

(a) Discuss, in terms of its structure, why an aluminium saucepan is impermeable to water. [2]

.....

.....

.....

.....

.....

(b) Both materials are also used in other applications that are more demanding of their physical properties. Carbon nanotubes are often incorporated into their structures to improve certain properties.

(i) State the name given to a material composed of two distinct solid phases. [1]

.....

(ii) State one physical property of HDPE that will be affected by the incorporation of carbon nanotubes. [1]

.....

.....

(Option A continues on the following page)





**(Option A, question 3 continued)**

(iii) Describe how carbon nanotubes are produced by chemical vapour deposition (CVD). [3]

.....

.....

.....

.....

.....

.....

.....

.....

(iv) State the property of carbon nanotubes that enables them to form a nematic liquid crystal phase. [1]

.....

.....

**(Option A continues on the following page)**



28EP09

Turn over

**(Option A continued)**

4. Both HDPE (high density polyethene) and LDPE (low density polyethene) are produced by the polymerization of ethene.

(a) Both of these are thermoplastic polymers. Outline what this term means. [1]

.....  
.....  
.....

(b) (i) Compare and contrast the structures of HDPE and LDPE. [2]

.....  
.....  
.....  
.....

(ii) State **one** way in which a physical property of HDPE, other than density, differs from that of LDPE as a result of this structural difference. [1]

.....  
.....

(c) (i) The production of HDPE involves the use of homogeneous catalysts. Outline how homogeneous catalysts reduce the activation energy of reactions. [1]

.....  
.....  
.....

**(Option A continues on the following page)**



28EP10

**(Option A, question 4 continued)**

- (ii) Trace amounts of metal from the catalysts used in the production of HDPE sometimes remain in the product. State a technique that could be used to measure the concentration of the metal.

[1]

.....  
.....

- (d) Suggest **two** of the major obstacles, other than collection and economic factors, which have to be overcome in plastic recycling.

[2]

.....  
.....  
.....  
.....  
.....

- (e) Suggest why there are so many different ways in which plastics can be classified. HDPE can, for example, be categorized thermoplastic, an addition polymer, having Resin Identification Code (RIC) 2, etc.

[1]

.....  
.....  
.....

**(Option A continues on the following page)**



28EP11

Turn over

**(Option A continued)**

5. Aluminium is produced by the electrolysis of a molten electrolyte containing bauxite.

Determine the mass, in g, of aluminium produced by the passage of a charge of  $1.296 \times 10^{13}$  C. Use sections 2 and 6 of the data booklet.

[3]

.....

.....

.....

.....

.....

.....

**End of Option A**



28EP12

**Option B — Biochemistry**

6. Insulin was the first protein to be sequenced. It was determined that the end of one chain had the primary structure Phe–Val–Asn–Gln.

(a) Draw the structural formula of a dipeptide containing the residues of valine, Val, and asparagine, Asn, using section 33 of the data booklet. [2]

(b) Deduce the strongest intermolecular forces that would occur between the following amino acid residues in a protein chain. [2]

Phenylalanine and valine:

.....

Glutamine and asparagine:

.....

(c) Paper chromatography can be used to identify the amino acids in insulin.

(i) State the name of the process used to break down the insulin protein into its constituent amino acids. [1]

.....

**(Option B continues on the following page)**



**(Option B, question 6 continued)**

(ii) Outline how the amino acids may be identified from a paper chromatogram. [1]

.....  
.....  
.....

7. Saturated lipids found in butter and unsaturated lipids found in fish oil readily become rancid.

(a) (i) Identify the type of rancidity occurring in saturated lipids and the structural feature that causes it. [2]

.....  
.....  
.....

(ii) State one factor that increases the rate at which saturated lipids become rancid. [1]

.....

(b) Butter contains varying proportions of oleic, myristic, palmitic and stearic acids. Explain in terms of their structures why stearic acid has a higher melting point than oleic acid, using section 34 of the data booklet. [3]

.....  
.....  
.....  
.....  
.....  
.....

**(Option B continues on the following page)**



**(Option B, question 7 continued)**

- (c) (i) Fish oil is an excellent dietary source of omega-3 fatty acids. Outline **one** impact on health of consuming omega-3 fatty acids. [1]

.....  
.....

- (ii) Predict the solubility of retinol (vitamin A) in body fat, giving a reason. Use section 35 of the data booklet. [1]

.....  
.....

- (iii) Explain why sharks and swordfish sometimes contain high concentrations of mercury and polychlorinated biphenyls (PCBs). [2]

.....  
.....  
.....  
.....

- (iv) Plastics are another source of marine pollution. Outline one way in which plastics can be made more biodegradable. [1]

.....  
.....  
.....

**(Option B continues on the following page)**



**(Option B continued)**

8. Polymers of  $\alpha$ -glucose include the disaccharide maltose and the polysaccharide amylose, a type of starch. The cyclic structure of  $\alpha$ -glucose is shown in section 34 of the data booklet.

(a) State the specific type of linkage formed between  $\alpha$ -glucose fragments in both maltose and amylose. [1]

.....

(b) A person with diabetes suffering very low blood sugar (hypoglycaemia) may be advised to consume glucose immediately and then eat a small amount of starchy food such as a sandwich. Explain this advice in terms of the properties of glucose and starch. [2]

Glucose:

.....

.....

Starch:

.....

.....

**End of Option B**





**Option C — Energy**

9. Greenhouse gases absorb infrared radiation.

(a) Identify one naturally occurring greenhouse gas, other than carbon dioxide or water vapour, and its natural source. [2]

Gas:  
.....

Source:  
.....  
.....

(b) Formulate an equation that shows how aqueous carbon dioxide produces hydrogen ions,  $H^+$  (aq). [1]

.....  
.....

(c) The concentrations of oxygen and nitrogen in the atmosphere are much greater than those of greenhouse gases. Outline why these gases do not absorb infrared radiation. [1]

.....  
.....

**(Option C continues on the following page)**



**(Option C continued)**

10. The increased concentration of carbon dioxide in the atmosphere is thought to result from the increased combustion of fossil fuels such as petroleum.

- (a) Identify an element, other than carbon and hydrogen, found at significant concentrations in fossil fuels. [1]

.....

- (b) Petroleum contains many hydrocarbons. Explain how these are separated by fractional distillation. [3]

.....  
.....  
.....  
.....  
.....  
.....

- (c) (i) Determine the specific energy and energy density of petrol (gasoline), using data from sections 1 and 13 of the data booklet. Assume petrol is pure octane,  $C_8H_{18}$ . Octane: molar mass =  $114.26 \text{ g mol}^{-1}$ , density =  $0.703 \text{ g cm}^{-3}$ . [2]

Specific energy in  $\text{kJ g}^{-1}$ :

.....  
.....  
.....

Energy density in  $\text{kJ cm}^{-3}$ :

.....  
.....  
.....

**(Option C continues on the following page)**



28EP18

(Option C, question 10 continued)

- (ii) Outline why the energy available from an engine will be less than these theoretical values. [1]

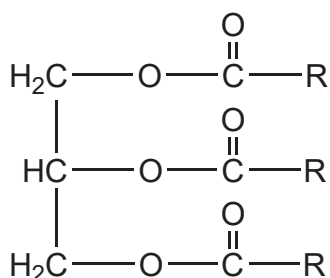
.....  
.....

11. One suggestion for the reduction of carbon footprints is the use of biofuels, such as vegetable oils, as a substitute for petroleum based fuels.

- (a) (i) Outline the major technical problem affecting the direct use of vegetable oils as fuels in internal combustion engines and the chemical conversion that has overcome this. [2]

.....  
.....  
.....  
.....  
.....

- (ii) State the formula of a fuel that might be produced from the vegetable oil whose formula is shown. [1]



.....  
.....

(Option C continues on the following page)



**(Option C, question 11 continued)**

- (b) Outline why biofuels are considered more environmentally friendly, even though they produce more carbon dioxide per kJ of energy than petroleum based fuels. [1]

.....  
.....  
.....

**12.** Nuclear fission of  $^{235}\text{U}$  is one source of electrical energy that has a minimal carbon footprint.

- (a) (i) Natural uranium needs to be enriched to increase the proportion of  $^{235}\text{U}$ . Suggest a technique that would determine the relative abundances of  $^{235}\text{U}$  and  $^{238}\text{U}$ . [1]

.....  
.....

- (ii) Explain how  $^{235}\text{U}$  fission results in a chain reaction, including the concept of critical mass. [3]

.....  
.....  
.....  
.....  
.....  
.....

- (b) Suggest one reason why there is opposition to the increased use of nuclear fission reactors. [1]

.....  
.....  
.....

**End of Option C**



28EP20

**Option D — Medicinal chemistry**

**13.** Many drugs, including aspirin, penicillin and codeine, have been modified from compounds that occur naturally.

(a) Aspirin is often taken to reduce pain, swelling or fever. State one other use of aspirin. [1]

.....  
.....

(b) (i) State what is meant by the bioavailability of a drug. [1]

.....  
.....

(ii) Outline how the bioavailability of aspirin may be increased. [1]

.....  
.....

**(Option D continues on the following page)**



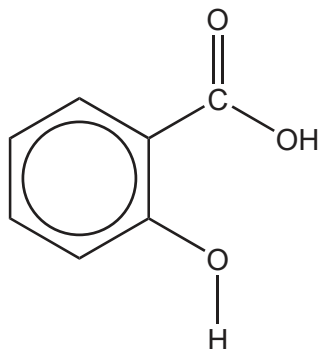
28EP21

**Turn over**

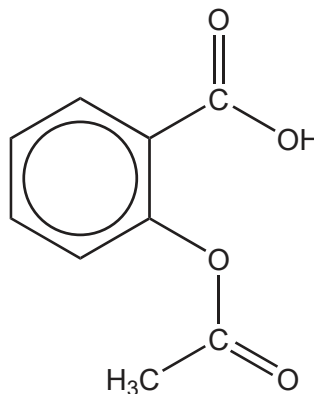
**(Option D, question 13 continued)**

- (c) (i) Compare and contrast the IR spectrum of aspirin with that of salicylic acid, using section 26 of the data booklet. [2]

Structure of salicylic acid



Structure of aspirin



One absorption found in both spectra:

.....  
.....

One absorption found in only one of the spectra:

.....  
.....

- (ii) Describe how penicillin combats bacterial infections. [2]

.....  
.....  
.....  
.....

**(Option D continues on the following page)**



**(Option D, question 13 continued)**

- (iii) Outline **two** consequences of prescribing antibiotics such as penicillin unnecessarily. [2]

.....

.....

.....

.....

- (iv) State how penicillins may be modified to increase their effectiveness. [1]

.....

.....

- (d) (i) Morphine and codeine are strong analgesics. Outline how strong analgesics function. [1]

.....

.....

.....

- (ii) Suggest one reason why codeine is more widely used than morphine as an analgesic. [1]

.....

.....

**(Option D continues on the following page)**



**(Option D continued)**

**14.** Excess stomach acid can be counteracted by a range of medications.

- (a) (i) An antacid tablet contains 680 mg of calcium carbonate,  $\text{CaCO}_3$ , and 80 mg of magnesium carbonate,  $\text{MgCO}_3$ .

State the equation for the reaction of magnesium carbonate with hydrochloric acid.

[1]

.....

.....

- (ii) Determine the amount, in mol, of hydrochloric acid neutralized by **one antacid tablet**.

[2]

.....

.....

.....

.....

.....

.....

- (b) Explain how omeprazole (Prilosec) reduces stomach acidity.

[2]

.....

.....

.....

.....

**(Option D continues on the following page)**





**(Option D continued)**

**15.** Antiviral drugs are a major research focus.

- (a) Oseltamivir (Tamiflu) and zanamivir (Relenza) are used against flu viruses. Explain how these drugs function. [2]

.....

.....

.....

.....

- (b) Shikimic acid, the precursor for oseltamivir (Tamiflu), was originally extracted from star anise, and is now produced using genetically modified *E. coli* bacteria.

Suggest **one** difficulty associated with synthesizing oseltamivir (Tamiflu) from star anise. [1]

.....

.....

.....

**End of Option D**

---



Please **do not** write on this page.

Answers written on this page  
will not be marked.



28EP26

Please **do not** write on this page.

Answers written on this page  
will not be marked.



28EP27

Please **do not** write on this page.

Answers written on this page  
will not be marked.



28EP28